





Name:


1 Nutze die Kraft der Fünf. Wie viele sind es zusammen?



$$5 + 2 = \dots\dots$$



$$5 + 5 + 3 = \dots\dots$$



$$5 + 5 + 5 + 1 = \dots\dots$$




$$5 + 5 + 5 + 5 = \dots\dots$$



Name:

1 Nutze die Kraft der Fünf. Wie viele sind es zusammen?




$$5 + 2 = \dots 7 \dots$$



$$5 + 5 + 3 = \dots 13 \dots$$



$$5 + 5 + 5 + 1 = \dots 16 \dots$$



$$5 + 5 + 5 + 5 = \dots 20 \dots$$