




Name: .....


1 Nutze die Kraft der Fünf. Wie viele sind es zusammen?




$$5 + 5 + 5 + 5 = \dots\dots$$



$$5 + 5 + 3 = \dots\dots$$



$$5 + 2 = \dots\dots$$



$$5 + 5 + 5 + 3 = \dots\dots$$




Name: .....


1 Nutze die Kraft der Fünf. Wie viele sind es zusammen?




$$5 + 5 + 5 + 5 = \mathbf{20}$$



$$5 + 5 + 3 = \mathbf{13}$$



$$5 + 2 = \mathbf{7}$$



$$5 + 5 + 5 + 3 = \mathbf{18}$$